

3.11


8 17 18 9 16



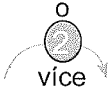
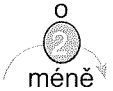
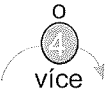
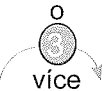
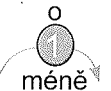
Na zahradě bylo 18 jabloní. Švestek bylo o 9 méně než jabloní.
Kolik bylo na zahradě švestek?

↓ 18
Š o 9 méně
18 - 9 = 9
Š bylo 9.





25. Vypočítej.

									
16	18	11		14		8		12	
13		20		16		10		20	
18		14		11		17		14	
15		17		13		9		19	
14		10		15		15		10	
17		12		6		7		15	
10		19		7		16		11	
12		18		9		13		17	

26. Vypočítej.

$11 - 7 =$ _____	$11 + 9 =$ _____	$13 - 5 =$ _____	$4 + 9 =$ _____
$14 - 5 =$ _____	$13 + 7 =$ _____	$14 - 6 =$ _____	$5 + 8 =$ _____
$12 - 3 =$ _____	$6 + 8 =$ _____	$14 - 9 =$ _____	$8 + 3 =$ _____
$11 - 4 =$ _____	$9 + 3 =$ _____	$14 - 0 =$ _____	$7 + 8 =$ _____
$13 - 5 =$ _____	$8 + 4 =$ _____	$13 - 7 =$ _____	$7 + 9 =$ _____
$17 - 8 =$ _____	$7 + 7 =$ _____	$13 - 9 =$ _____	$5 + 9 =$ _____
$16 - 7 =$ _____	$6 + 6 =$ _____	$14 - 7 =$ _____	$8 + 9 =$ _____
$15 - 7 =$ _____	$9 + 9 =$ _____	$14 - 8 =$ _____	$6 + 7 =$ _____
$13 - 6 =$ _____	$8 + 8 =$ _____	$15 - 6 =$ _____	$6 + 5 =$ _____